



How to GUIDE

Student: Start **Public** Course



Public Students start course

Before you begin

Log in

You must be logged into to E-Learn for you to access our public courses, click on the below link to login

<https://e-learn.tsarona.co.za/login/index.php>

Note: If you not yet registered, please see below

Registration

If this is your first time on E-Learn site then you must register. If you need help in to understand how to register, go to below link

<https://tsarona.co.za/e-learning/>

Step 1

On the menu item, click on the **Courses => All Courses** menu to navigate to the public courses

Step 2

Open the public courses and select he course that you are interested in

Step 3

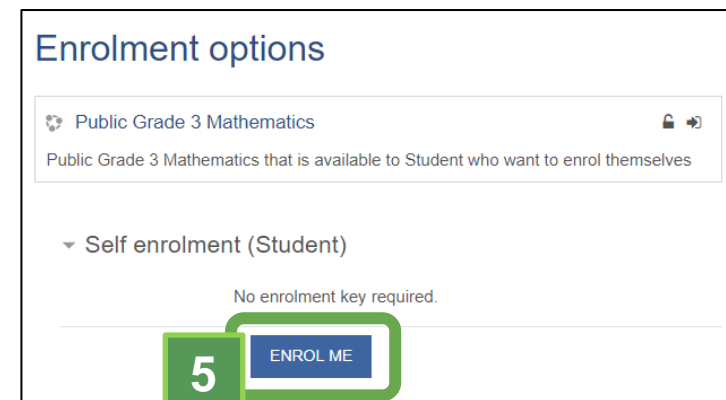
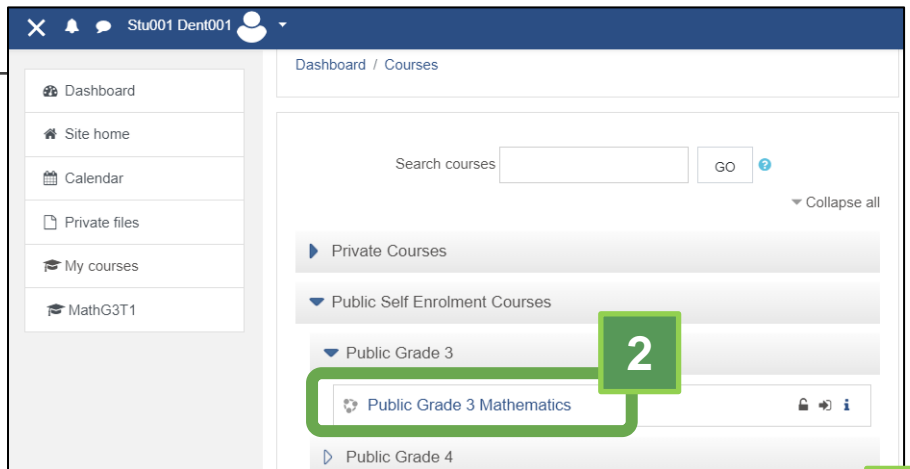

Click on the Setting gear as highlighted in the images to enroll yourself in the course

Step 4

Click on the **"Enrol me in this course"** button and the screen will redirect to the **Enrolment Options** screen

Step 5

Click on the **"Enrol Me"** button and the screen will redirect to the course material



Public Students start course

Step 6

You will see that you are now Enrolled to the course, this means you can start with the course material and activities, Proceed to step Seven

Step 7

Select an activity in your course that you want to start with

Step 8

You will now be able to see the details of the activity, read the activity material and then test yourself by clicking the **"Attempt Quiz Now" Button**

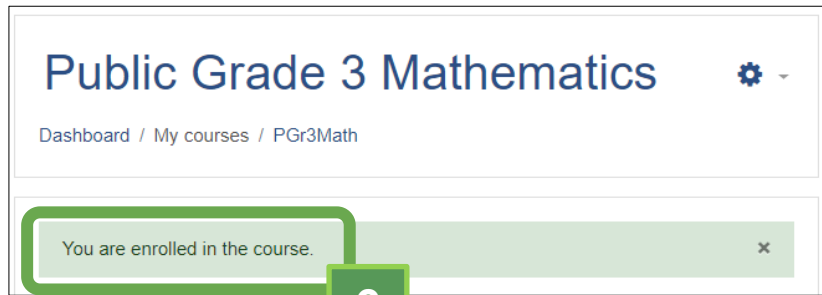
Step 9

Read the math's sum and understand the instruct that is given

Select your answer and then move to **step 10**

Step 10

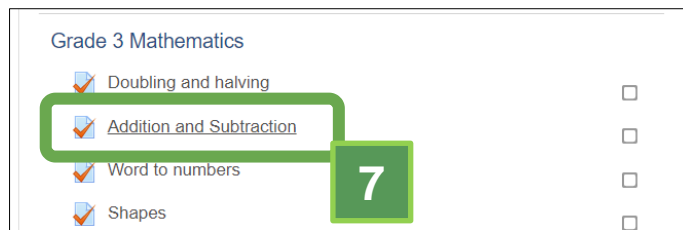
Once you are done with your task click on the **"Next Page"** button



Public Grade 3 Mathematics

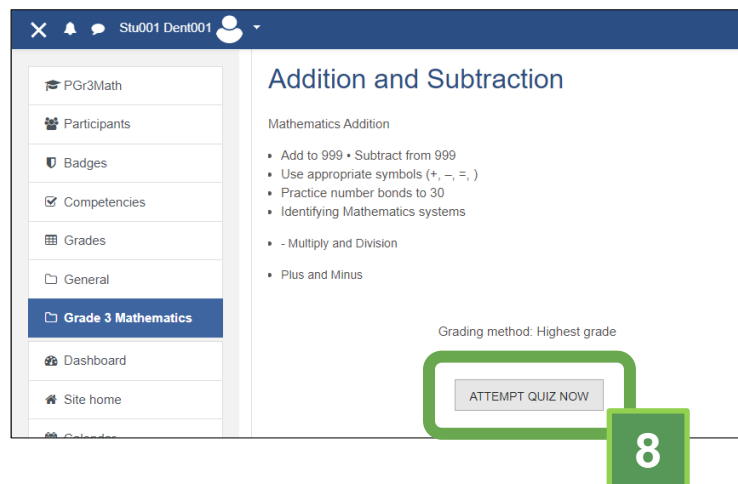
Dashboard / My courses / PGr3Math

You are enrolled in the course.



Grade 3 Mathematics

- Doubling and halving
- Addition and Subtraction**
- Word to numbers
- Shapes



Stu001 Dent001

PGr3Math

Participants

Badges

Competencies

Grades

General

Grade 3 Mathematics

Dashboard

Site home

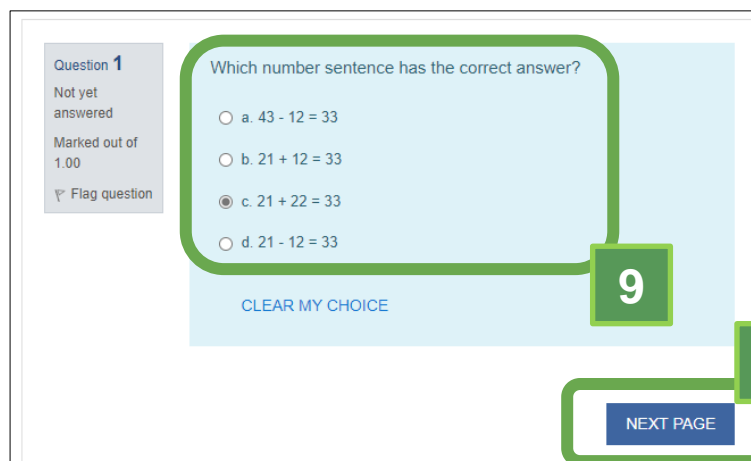
Addition and Subtraction

Mathematics Addition

- Add to 999 • Subtract from 999
- Use appropriate symbols (+, -, =, >, <)
- Practice number bonds to 30
- Identifying Mathematics systems
- - Multiply and Division
- Plus and Minus

Grading method: Highest grade

ATTEMPT QUIZ NOW



Question 1

Not yet answered

Marked out of 1.00

Flag question

Which number sentence has the correct answer?

- a. $43 - 12 = 33$
- b. $21 + 12 = 33$
- c. $21 + 22 = 33$
- d. $21 - 12 = 33$

CLEAR MY CHOICE

NEXT PAGE

Public Students start course

Step 11

Complete the remaining questions with you answer correctly type in the text fields

Once you are done, click on the **"Finish Attempt..."** button to continue

Step 12

You will now see a summary of all your attempts, show the number of tasks that you were given and how many of them you have answered, if you have not completed some, you can return to the questions so that you can answer them by clicking the **"Return to Attempt"** button.

However, if you have completed the activity and are happy with your results then please click on the **"Submit all and finish"** button to continue.

Step 13

Now that you have completed your activity, you will see a list of all the tests you have taken, with the result of your test, review your answers

Step 14

Once you are satisfied with your review, you can click on **"Finish review"** link demonstrated on **Step 13**

Question 6

Not yet answered

Marked out of 3.00

Flag question

2, 4, 6, 8, ..., 12, 14, 16, 18, ..., 22

In the above statement there are 2 missing numbers

1. Add those missing number together, what answer do you get?

Answer:

11

PREVIOUS PAGE

FINISH ATTEMPT ...

Addition and Subtraction

Summary of attempt

Question	Status
1	Answer saved
2	Answer saved
3	Answer saved
4	Answer saved
5	Not yet answered
6	Not yet answered

RETURN TO ATTEMPT

SUBMIT ALL AND FINISH

12

Started on Thursday, 2 July 2020, 1:11 AM

State Finished

Completed on Thursday, 2 July 2020, 1:17 AM

Time taken 5 mins 28 secs

Grade 0.00 out of 10.00 (0%)

Quiz Navigation

1

2

3

4

5

6

Show questions that:

Finish review

Question 1

Incorrect

Mark 0.00 out of 1.00

Flag question

Which number sentence has the correct answer?

a. $43 - 12 = 33$

b. $21 + 12 = 33$

c. $21 + 22 = 33$

d. $21 - 12 = 33$

Your answer is incorrect.

The correct answer is:

$21 + 12 = 33$

14

13

Step 15

Now that you have completed your activity, you will see a summary of your attempts for this activity, you can now move on to the next course by clicking the button as demonstrated in **Step 15**

For more information

Log in

You must be logged into to E-Learn for you to access our public courses, click on the below link to login

<https://e-learn.tsarona.co.za/login/index.php>

Note: If you not yet registered, please see below

Registration

If this is your first time on E-Learn site then you must register. If you need help in to understand how to register, go to below link

<https://tsarona.co.za/e-learning/>

Tutorials

For more tutorials, please visit

<https://tsarona.co.za/e-learning/>

Addition and Subtraction

Mathematics Addition

- Add to 999 • Subtract from 999
- Use appropriate symbols (+, -, =,)
- Practice number bonds to 30
- Identifying Mathematics systems
- - Multiply and Division
- Plus and Minus

Grading method: Highest grade

Summary of your previous attempts

Attempt	State	Grade / 10.00	Review
1	Finished Submitted Thursday, 2 July 2020, 1:17 AM	0.00	Review

Highest grade: 0.00 / 10.00.

RE-ATTEMPT QUIZ

◀ DOUBLING AND HALVING

Jump to...

WORD TO NUMBERS ▶

15